


# Numbers and Number Parts to 10

CA Standards  
KEY NS 1.1, MR 1.2

Count. Write the number.

Jon has a fish tank like the one in the picture.



1. How many  does Jon have?

\_\_\_\_\_ 

2. How many  does Jon have?



\_\_\_\_\_ 

3. How many  does Jon have?

\_\_\_\_\_ 

4. How many  does Jon have?

\_\_\_\_\_ 

5. How many  +  does Jon have?

\_\_\_\_\_  

6. How many  +  does Jon have?

\_\_\_\_\_  