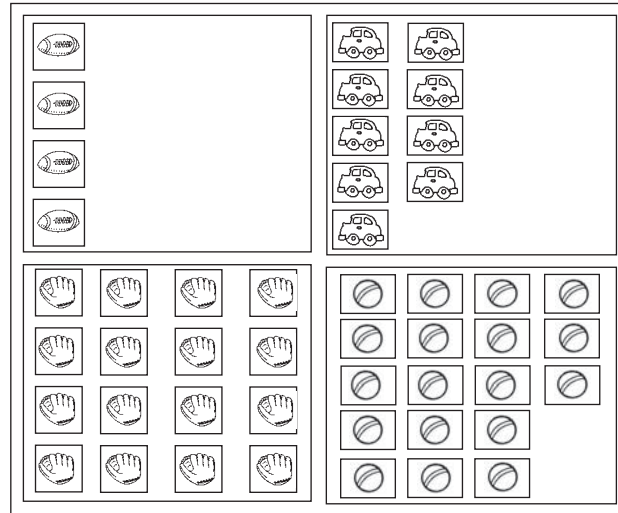


Numbers and Number Parts to 20


CA Standards
KEY NS 1.1, MR 1.2

Nick's Stickers



Use the picture above to solve.

1. How many  does Nick have?

_____ 


3. How many  does Nick have?

_____ 


5. How many  +  does Nick have?

_____  

2. How many  does Nick have?

_____ 

4. How many  does Nick have?

_____ 

6. How many  +  does Nick have?

_____  