




One More, One Less


CA Standards
KEY NS 2.3, KEY NS 1.1





Solve.

1. How many  does Mike have?



3. There were 4  in the . Then 1 more jumps in. How many  are in the











5. Julius had 3  Red and 6  Yellow. He gets 1 more  Yellow. How many  Yellow does he have now?



2. How many  does Patty have?



4. There were 9  on a . Then 1  flies away. How many  are on the leaf now?

6. Marta had 3  Blue and 7  Orange. She gives 1  Blue to a friend. How many  Blue does she have left?

