






# Ten More, Ten Less

CA Standard  
KEY NS 2.3**Solve.**

1. How many  does Tom have?



\_\_\_\_\_


3. Neva has **41** .  
Dave has **10** more  than Neva. How many  does Dave have?

\_\_\_\_\_ 




5. Adam had **25** red stickers and **17** blue stickers. He gives **10** red stickers to Sally. How many red stickers does Adam have now?

\_\_\_\_\_ red stickers

2. How many  does Frank have?



\_\_\_\_\_

4. Ari has **36** . Geno has **10** less  than Ari. How many  does Geno have?

\_\_\_\_\_ 

6. Chu had **34** big marbles and **19** small marbles. He gets **10** more small marbles. How many small marbles does Chu have now?

\_\_\_\_\_ small marbles