



Create and Solve

CA Standards
KEY NS 1.1, KEY NS 2.3


Solve.


1. How many  are on the tree?






_____ 

2. How many  are in the nest?



_____ 

3. There were **15**  in the pond. **1**  swims away. How many  are left?

_____ 

4. Mary counts **25** cows in the barn. Mark counts **10** more cows than Mary. How many cows does Mark count?

_____ cows

5. Callie sees **14** frogs and **17** ducks in the pond. Then **10** frogs hop away. How many frogs are there now?

_____ frogs

6. Terrell had **16** rocks and **18** shells. He finds **10** more shells. How many shells does Terrell have now?

_____ shells