






Draw to Subtract

CA Standards

KEY NS 2.1, KEY NS 2.5

Solve. Draw pictures if you wish.

1. Tad has 5  Then 2  swim away. How many  are left?

$$5 - 2 = \underline{\quad\quad} \quad \text{fish}$$




3. Mimi has 8 apples. She gives 4 apples away. How many apples does Mimi have left?

$$8 - 4 = \underline{\quad\quad} \text{ apples}$$

5. Bob has 10 red pencils and 7 green pencils. He loses 3 red pencils. How many red pencils does Bob have left?

$$\underline{\quad\quad} - \underline{\quad\quad} = \underline{\quad\quad}$$

red pencils

2. Tara has 7  Then 4  blow away. How many  are left?

$$7 - 4 = \underline{\quad\quad} \quad \text{balloon}$$

4. Kim has 9 hair bows. She gives 2 to a friend. How many hair bows does Kim have left?

$$9 - 2 = \underline{\quad\quad} \text{ hair bows}$$

6. Luis has 12 big shells and 11 small shells. He gives 5 small shells to Sal. How many small shells does Luis have left?

$$\underline{\quad\quad} - \underline{\quad\quad} = \underline{\quad\quad}$$

small shells