

Subtraction Number Sentences


CA Standards
AF 1.2, KEY NS 2.1

Write how many are left.

1. There are 5  in a tree.
Then 3  fly away.





How many  are left?

$$5 - 3 = \underline{\quad} \text{  left}$$

3. 4 candles light the room.
1 candle burns out.
How many candles are left
burning?
 $4 - 1 = \underline{\quad}$ candles left

5. There are 7 red ants and 3
black ants on a leaf.
Then 4 red ants crawl away.
How many ants are left?
 $\underline{\quad} - \underline{\quad} = \underline{\quad}$
ants left

2. 3  sit on a log.
2  hop away.
How many frogs are left?



$$3 - 2 = \underline{\quad} \text{  left}$$

4. 6 cows are in the field.
2 cows go into the barn.
How many cows are left in
the field?
 $6 - 2 = \underline{\quad}$ cows left

6. There are 2 cats and 6
kittens in the basket.
2 kittens jump out.
How many kittens are left?
 $\underline{\quad} - \underline{\quad} = \underline{\quad}$
kittens left