










Draw a Picture

CA Standards
KEY NS 2.5, MR 2.2

Read to solve. Write the difference.

1. There are 8  on a . Then 3  fly away. How many  are left on the ?

$$8 - 3 = \underline{\hspace{2cm}} \quad \text{butterfly}$$

2. There are 6  in the . Then 2  fly away. How many  are left in the tree?

$$6 - 2 = \underline{\hspace{2cm}} \quad \text{bird}$$

3. There are 7 apples in the bowl. Sasha takes 4 apples. How many apples are in the bowl now?

$$7 - 4 = \underline{\hspace{2cm}} \text{ apples}$$

4. Julian has 9 baseballs. He throws 3 baseballs over the fence. How many baseballs does he have left?

$$9 - 3 = \underline{\hspace{2cm}} \text{ baseballs}$$

5. Caleb has 7 golf balls and 5 basketballs. He loses 5 golf balls at the park. How many golf balls does Caleb have left?

$$\underline{\hspace{1cm}} \bigcirc \underline{\hspace{1cm}} \bigcirc \underline{\hspace{1cm}}$$

golf balls

6. Jaquilla has 9 red books and 8 green books. She gives 4 green books to a friend. How many green books does Jaquilla have left?

$$\underline{\hspace{1cm}} \bigcirc \underline{\hspace{1cm}} \bigcirc \underline{\hspace{1cm}}$$

green books