







# Make a Tally Chart

CA Standards  
SDAP 1.0, SDAP 1.2


Use the picture.

Complete the tally chart.


Things That Fly	
	
	
	






Use the tally chart to solve.

1. Timmy counts the .  
How many does he count?


\_\_\_\_\_ 

3. Deb counts the .  
How many does she count?



\_\_\_\_\_ 

5. How many more  and  are there than ?




\_\_\_\_\_

2. Flor counts the .  
How many does she count?

\_\_\_\_\_ 

4. Sal counts  and .  
How many does he count in all?

\_\_\_\_\_

6. How many more  and  are there than ?

\_\_\_\_\_