



Shape and Size Patterns

CA Standards
SDAP 2.0, **KEY** SDAP 2.1


Solve.

1. Randy is making a belt.

His pattern is




What shape comes next?



3. Pedro is making a quilt.

His pattern is



He left out one shape.

Draw the missing shape.

5. Trina is making a bracelet.

Her pattern is



He left out **2** shapes.


Draw the missing shapes in order.

2. Suzy is making a necklace.

Her pattern is



What shape comes next?



4. Kara is making a scarf.

Her pattern is



She left out one shape.

Draw the missing shape.

6. Kent is making a belt.

His pattern is



He left out **2** shapes.

Draw the missing shapes in order.