



# Ten More, Ten Less

CA Standards




KEY NS 2.3, KEY NS 1.1

Solve.




1. How many  does Mona have?



\_\_\_\_\_ 


3. Ella has 62 .  
Pedro has 10 more  
 than Ella.  
How many  does Pedro have?


\_\_\_\_\_ 




5. Miles has 25 .  
Sally has 10 less  
 than Miles.  
How many  do they have in all?


\_\_\_\_\_ 




2. How many  does Caleb have?



\_\_\_\_\_ 

4. Sami has 76 .  
Vinny has 10 less  than Sami.  
How many  does Vinny have?

\_\_\_\_\_ 

6. Sue Jong has 24 .  
Mike has 10 more  
 than Sue Jong.  
How many  do they have in all?

\_\_\_\_\_ 