




# Use Estimation to Compare Numbers

CA Standards  
NS 3.1, **KEY** NS 1.2

Solve. Circle a group of 10 to help you.


1. The children see turtles on their class trip. About how many turtles do they see?



20

30


3. The children also see birds. About how many birds do they see?



50


60

5. Finally, the children see flowers. About how many flowers do they see?



\_\_\_\_\_ flowers


2. The children see ants marching on the ground. About how many ants do they see?



50

10

4. Next, the children see monkeys. About how many monkeys do they see?



30

20

6. It is time for the children to get on the bus. About how many children get on the bus?



\_\_\_\_\_ children