



Add Doubles

CA Standards

KEY NS 2.1, MR 1.2

Solve.

1. Kim has **2** bananas. She has **2** oranges. How many pieces of fruit does Kim have in all?




$2 + 2 = \underline{\quad}$ pieces
of fruit


3. There are **7** apples on the tree. There are **7** apples on the ground. How many apples are there in all?

$\underline{\quad}$ apples

5. Tara has **18** coins. She puts them into **2** equal groups. How many coins are in each group?

$\underline{\quad}$ coins

2. Luka has **5** red . He has **5** green . How many  does he have in all?

$5 + 5 = \underline{\quad}$ 

4. There are **6** flowers in a garden. There are **6** flowers in a vase. How many flowers are there in all?

$\underline{\quad}$ flowers

6. Luis has **16** marbles. He puts them into **2** equal groups. How many marbles are in each group?

$\underline{\quad}$ marbles