

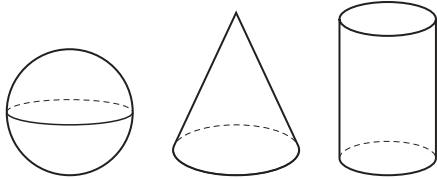


Solid Figures

CA Standards
MG 2.2, SDAP 1.1

Solve.

1. Mike has these figures.

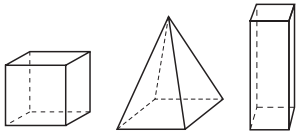


What is his sorting rule?

Figures that roll

Figures with flat surfaces

3. Marge has these figures.



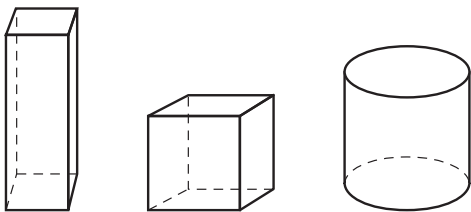
What is her sorting rule?

Figures with corners

Figures with curved surfaces

5. Rosa has these figures.

What is her sorting rule?



2. Lara has these figures.

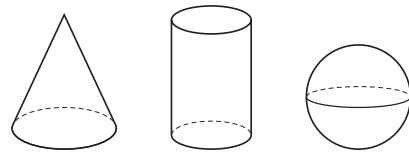


What is her sorting rule?

Solid figures

Plane figures

4. Pedro has these figures.



What is his sorting rule?

Figures with curved surfaces

Figures that stack

6. Jack has these figures.

What is his sorting rule?

