







Identify Faces of Solid Figures

CA Standards
MG 2.1, MG 2.0

Solve.

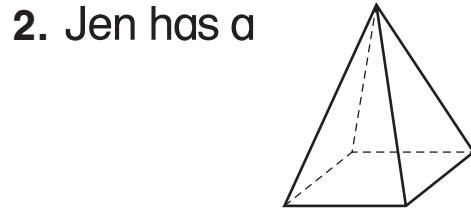


Circle the picture that shows a face of his solid.

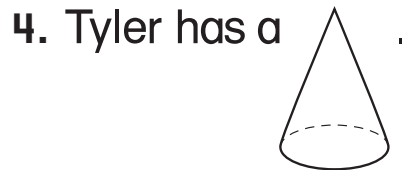

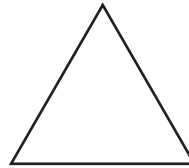


What is the shape of the faces?

5. Lalo has a cube and a rectangular prism.
What is the shape of a face that they both have?



Circle the picture that shows a face of her solid.



What is the shape of the face?

6. Emily has a cone and a cylinder.
What is the shape of the face that they both have?
