




Compare Length and Height

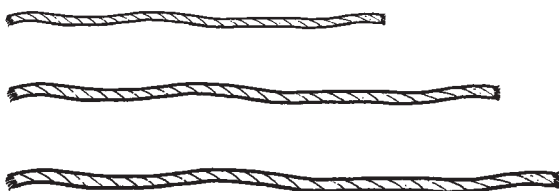
CA Standards
MG 1.1, MG 1.0

Solve.

1. Mack and Mike each have a new pencil. Mike's pencil is longer. Circle Mike's pencil.

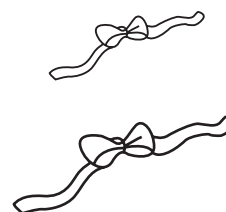


3. Tam has 3 pieces of string. She wants to use the longest piece. Circle the string Tam should use.

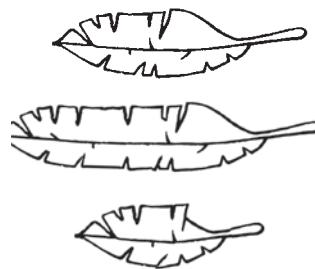


5. Sam is shorter than Pedro.
Bess is taller than Ann.
Ann is taller than Pedro.
Who is the tallest?
- _____

2. Jen and Luz each have a new hair ribbon. Jen's hair ribbon is shorter. Circle Jen's hair ribbon.



4. Nick finds 3 feathers. He gives the shortest feather away. Circle the feather Nick gives away.



6. The yellow ribbon is longer than the green ribbon. The blue ribbon is longer than the red ribbon. The red ribbon is shorter than the green ribbon. Which ribbon is the shortest?
- _____ ribbon