


Nonstandard Units

CA Standards
MG 1.1, MG 1.0**Solve.**

1. Brian's string is **18**  long.

Anil's string is **10**  long.

Who has the longer string?

3. Larry draws a bug that is about **1**  long.


Circle Larry's bug.




5. Jake lines up **4** crayons end to end. How long is the line of crayons?




_____ paper clips

2. Susan's pencil is **12**  long.

Mark's pencil is **8**  long.

Who has the shorter pencil?

4. Dora draws a rope that is about **5**  long.

Circle Dora's rope.



6. Maya's ribbon is about **8** paper clips long. Zach's ribbon is about **5** paper clips long. About how many paper clips longer than Zach's ribbon is Maya's ribbon?

about _____ paper clips