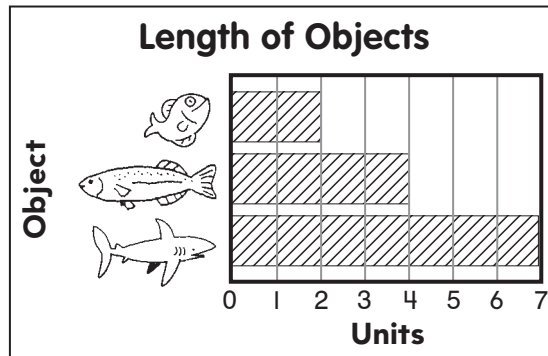


Use a Graph

CA Standards
KEY SDAP 1.2, MG 1.1





Use the graph to solve.




1. How many units long is the



_____ units

3. How many units long are the  and  in all? Write the number sentence.

_____ ○ _____ units in all



5. How many more units long is the  than the  and  combined? Write the number sentence.

_____ ○ _____ more units





2. How many units long is the



_____ units

4. How many more units long is the  than the ? Write the number sentence.

_____ ○ _____ more units

6. There  grows 3 units. The  grows 2 units. Now how many units long are the  and  in all? Write the number sentence.

_____ ○ _____ units in all