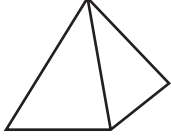
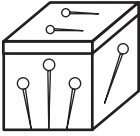
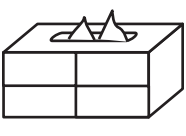





Name \_\_\_\_\_ Date \_\_\_\_\_

# Solid Figures

**CA Standards**  
MG 2.5, MG 2.6

Use the objects below to solve problems 1–5.

					
Paperweight	Pin Box	Tissue Box	Party Hat	Soup Can	Globe

1. Which objects will NOT roll smoothly?

---



---

3. Chantall says that the pin box is a cube. Emily says that it is a rectangular prism. Who is right? Explain your choice.

---



---



---



---



---

5. Meg stacked a cube onto a rectangular prism, and a cylinder on top of the cube. Which 3 objects did she use?

---



---

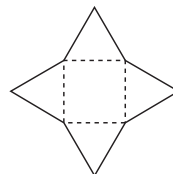
2. Name the solid figure that matches the soup can.

---

4. Which objects have faces that are circles?

---

6. The picture below shows an unfolded cardboard container. The dotted lines show where to fold. When the container is folded, what solid figure will its shape be?




---