




Name \_\_\_\_\_ Date \_\_\_\_\_

# Use a Graph

**CA Standard**  
MR 2.0

Use the line plot or bar graph to solve each problem.  
Explain why your answer makes sense.

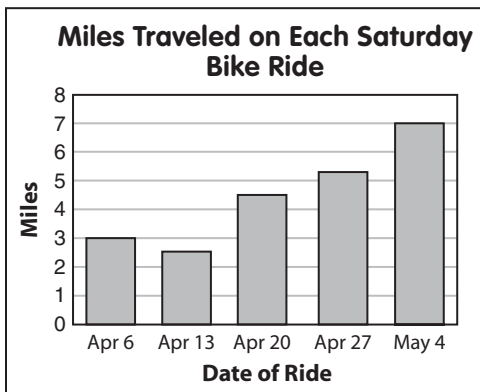


1. What was the most common number of riders on a Saturday ride?

\_\_\_\_\_

2. How many Saturday rides does the graph illustrate?

\_\_\_\_\_

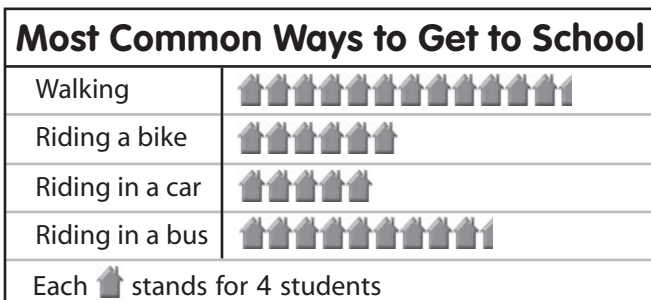


3. Which was the date of the shortest ride?

\_\_\_\_\_

4. Which two rides were the most similar in length?

\_\_\_\_\_



5. What is the difference between the number of students who walk and the number of students who ride in a car to school?

\_\_\_\_\_

6. How many students are counted in this graph?

\_\_\_\_\_