

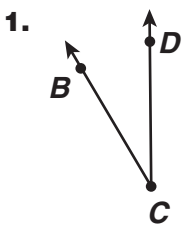


Name \_\_\_\_\_ Date \_\_\_\_\_

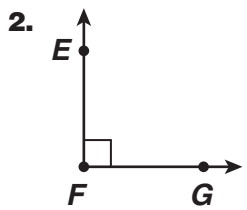
# Rays and Angles

CA Standards  
MG 3.5, MG 3.0

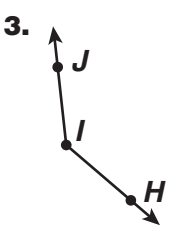
Name each angle in three ways. Then classify the angle as *acute*, *obtuse*, or *right*.



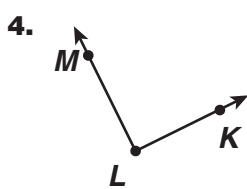
\_\_\_\_\_



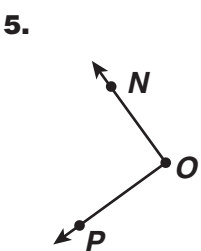
\_\_\_\_\_



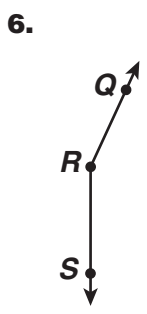
\_\_\_\_\_



\_\_\_\_\_



\_\_\_\_\_



\_\_\_\_\_