



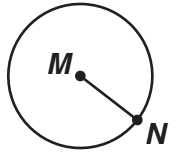
Name \_\_\_\_\_ Date \_\_\_\_\_

# Circles

**CA Standards**  
 MG 3.2, MG 3.5

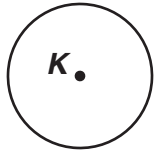
Name of the part of each circle that is given. Write *center*, *radius*, or *diameter*.

1.  $\overline{MN}$



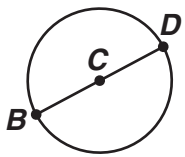
\_\_\_\_\_

2.  $K$



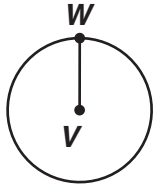
\_\_\_\_\_

3.  $\overline{BCD}$



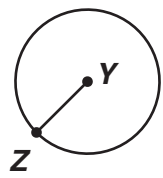
\_\_\_\_\_

4.  $\overline{VW}$



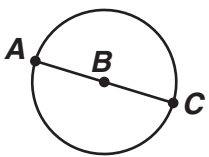
\_\_\_\_\_

5.  $\overline{YZ}$



\_\_\_\_\_

6.  $\overline{ABC}$



\_\_\_\_\_