




Name _____ Date _____

Line Symmetry

CA Standards
MG 3.0, MG 3.4

Look at the flag. Write how many lines of symmetry it has.
Draw the lines.

1. Japan




2. Austria




3. Canada



4. Somalia



5. Switzerland



6. Panama

