

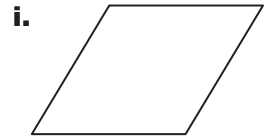
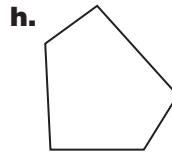
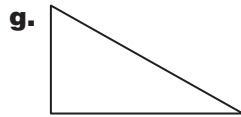
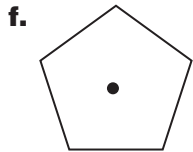
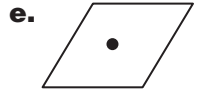
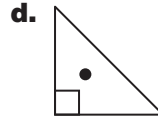
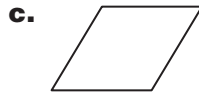
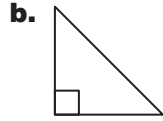
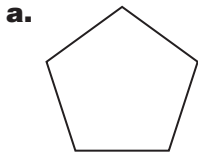


Name _____ Date _____

Congruent Figures

CA Standards
MG 3.0, MG 3.3

Write the letters of the figures to solve each problem. You can use a figure's letter more than once.



1. Which two triangles are congruent?

2. Which two triangles are *not* congruent?

3. Which two rhombuses are congruent?

4. Which two rhombuses are *not* congruent?

5. Which two pentagons are congruent?

6. Which two pentagons are *not* congruent?
