

Graph Math

Make a Graph

Make a graph of these shapes.       


Try This










Are there more circles or more squares?

Write the name of the number of squares.

Graph Math

Make a Graph

Make a graph of these shapes.       

Try This

Are there more circles or more squares?

Write the name of the number of squares.

There are more squares; four
