



# Time Passes

---

## Draw a Picture

Ken is up at 7:30 and is at camp at 9:00.

How long does it take him to get to camp? Draw the times to solve.



## Try This

Ken gets home at 4:30.

How long is he at camp?

Write your answer.

---

---


## Time Passes

---

### Draw a Picture

Ken is up at 7:30 and is at camp at 9:00.

How long does it take him to get to camp? Draw the times to solve.



**Child should show 7:30 on one clock and 9 o'clock on the other clock.**

### Try This

Ken gets home at 4:30.

How long is he at camp?

Write your answer.

**Ken is at camp for 7 and a half hours.**

---

---