



Half Past

Draw a Picture

Kit walked her dog. She left at 5 o'clock and returned at 5:30. How long was she gone? Draw the times to solve.



Try This


How long is a half-hour?

Write your answer.

Half Past

Draw a Picture

Kit walked her dog. She left at 5 o'clock and returned at 5:30. How long was she gone? Draw the times to solve.



Kit was gone a half-hour. Child should show 5 o'clock and 5:30.

Try This

How long is a half-hour?

Write your answer.

A half-hour is 30 minutes long.
