

Tally Ho!

Use a Chart

Show how many horses there are in each family now.

Big Red	
Black Beauty	
Freckles	

Try This




Write sentences.

Tell which family has the least number of horses. Tell which has the most horses.

Tally Ho!

Use a Chart

Show how many horses there are in each family now.

Big Red	 (10)
Black Beauty	 (5)
Freckles	 (4)

Try This

Write sentences.

Tell which family has the least number of horses. Tell which has the most horses.

The Freckles family has the least horses.

The Big Red family has the most horses.
