
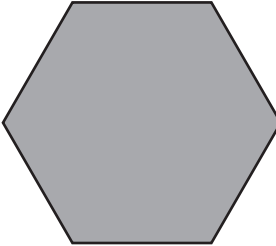

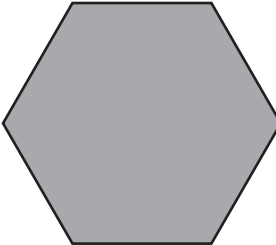


Geo Fractions


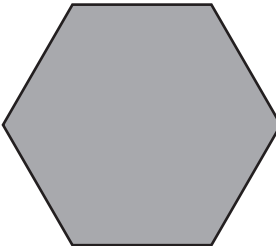
Directions: Follow the steps in the easel to answer the questions.

1.  = $\frac{1}{\square}$ 

Equivalent Fractions: _____ ; _____

2.  = $\frac{1}{\square}$ 

Equivalent Fractions: _____ ; _____

3.  = $\frac{1}{\square}$ 

Equivalent Fractions: _____ ; _____