

# Togetherhness



5

\_\_\_\_\_

6



7



10

\_\_\_\_\_

11



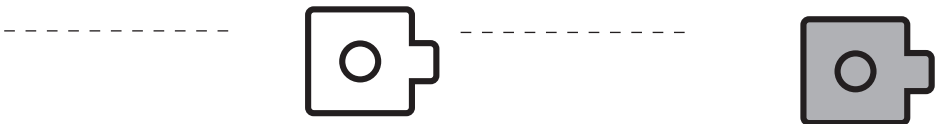
12



3

\_\_\_\_\_

4



5

**Directions:** Count the cubes in each part and write the number. Circle the whole number of cubes in each set.

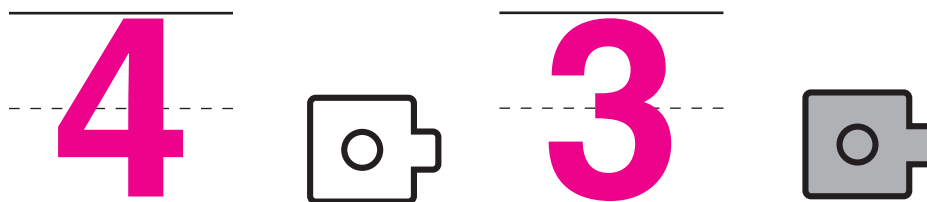
# Togetherness



5

6

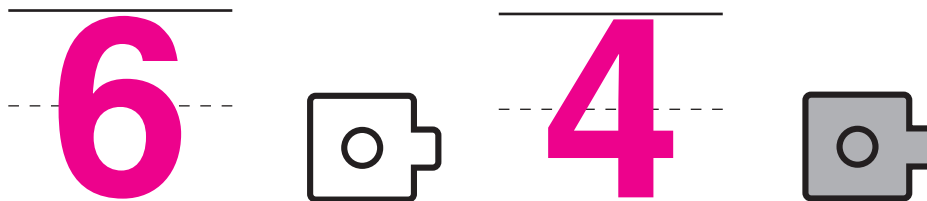
7



10

11

12



3

4

5



**Directions:** Count the cubes in each part and write the number. Circle the whole number of cubes in each set.