
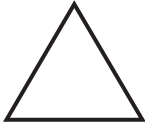
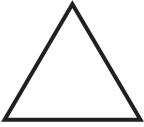
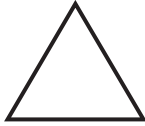

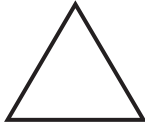












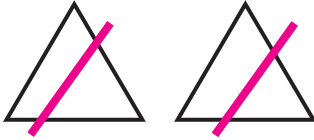


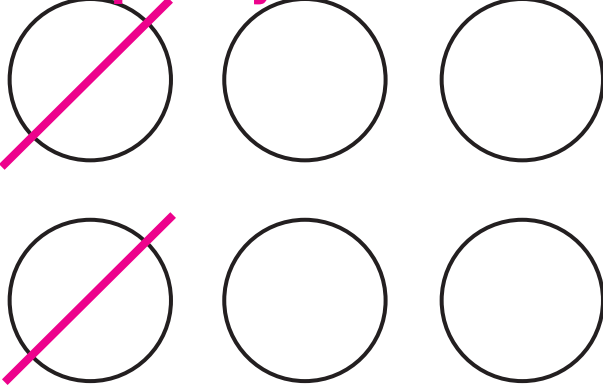

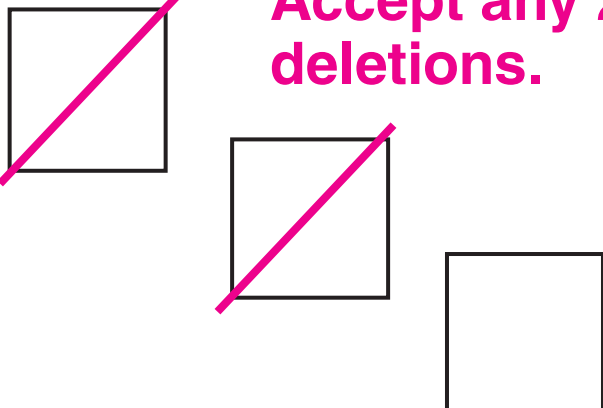


Bye-Bye!

| | | |
|---|---|--|
| <p> _____</p> <p>5</p> <p>-----</p> <p>_____</p> | <p>    </p> | <p>_____</p> <p>-----</p> <p>_____</p> |
| <p> _____</p> <p>6</p> <p>-----</p> <p>_____</p> | <p>     </p> | <p>_____</p> <p>-----</p> <p>_____</p> |
| <p> _____</p> <p>3</p> <p>-----</p> <p>_____</p> | <p>  </p> | <p>_____</p> <p>-----</p> <p>_____</p> |

Directions: 1–3 See the number and the shapes. Take away two of each shape. Write how many are left.

Bye-Bye!

| | | |
|---|--|-----------------|
| <p></p> <p>5</p> | <p>Accept any 2 deletions.</p> <p></p> <p></p> | <p>3</p> |
| <p></p> <p>6</p> | <p>Accept any 2 deletions.</p> <p></p> | <p>4</p> |
| <p></p> <p>3</p> | <p>Accept any 2 deletions.</p> <p></p> | <p>1</p> |

Directions: 1–3 See the number and the shapes. Take away two of each shape. Write how many are left.